

Please write clearly in block capitals.

Centre number

--	--	--	--	--

Candidate number

--	--	--	--

Surname

Forename(s)

Candidate signature

GCSE MATHEMATICS

H


Higher Tier Paper 2 Calculator

Thursday 8 November 2018 Morning Time allowed: 1 hour 30 minutes

Materials

For this paper you must have:

- a calculator
- mathematical instruments.



Instructions

- Use black ink or black ball-point pen. Draw diagrams in pencil.
- Fill in the boxes at the top of this page.
- Answer **all** questions.
- You must answer the questions in the spaces provided. Do not write outside the box around each page or on blank pages.
- Do all rough work in this book. Cross through any work you do not want to be marked.

Information

- The marks for questions are shown in brackets.
- The maximum mark for this paper is 80.
- You may ask for more answer paper, graph paper and tracing paper. These must be tagged securely to this answer book.

For Examiner's Use	
Pages	Mark
2–3	
4–5	
6–7	
8–9	
10–11	
12–13	
14–15	
16–17	
18–19	
20–21	
22–23	
TOTAL	

Advice

In all calculations, show clearly how you work out your answer.



Answer **all** questions in the spaces provided

- 1** What does $(A \cap B)$ represent in $P(A \cap B)$?
Circle your answer.

[1 mark]

A or B or both

A but not B

not A and not B

A and B

- 2** P is $(4, 9)$ and Q is $(-2, 1)$
Circle the midpoint of PQ .

[1 mark]

$(1, 5)$

$(3, 4)$

$(3, 5)$

$(6, 8)$

- 3** Which of these is a geometric progression?
Circle your answer.

[1 mark]

1 3 5 7 9

1 3 6 10 15

1 4 9 16 25

1 3 9 27 81



- 4 The bearing of A from B is 310°
Circle the bearing of B from A .

[1 mark]

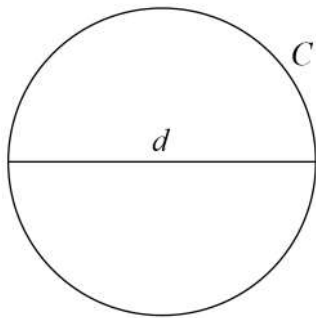
050°

110°

130°

220°

- 5 A circle has circumference C and diameter d .



$$C = kd$$

What **value** does the constant k represent?

[1 mark]

Answer _____



- 6 Here is some information about 20 trains leaving a station.

Number of minutes late, t	Number of trains	Midpoint	
$0 \leq t < 5$	12		
$5 \leq t < 10$	7		
$10 \leq t < 15$	1		
$t \geq 15$	0		

- 6 (a) Work out an estimate of the mean number of minutes late.

[3 marks]

Answer _____ minutes



6 (b) The station manager looks at the information in more detail.

Number of minutes late, t	Number of trains
$0 \leq t < 2$	12
$2 \leq t < 4$	0
$4 \leq t < 6$	7
$6 \leq t < 8$	0
$8 \leq t < 10$	0
$10 \leq t < 12$	1

He works out an estimate of the mean using this information.

How does his estimate compare with the answer to part (a)?

Tick **one** box.

[1 mark]

Higher than part (a)

Same as part (a)

Lower than part (a)

Not possible to tell

Turn over for the next question

Turn over ►



7 Work out the values of a and b in the identity

$$5(7x + 8) + 3(2x + b) \equiv ax + 13$$

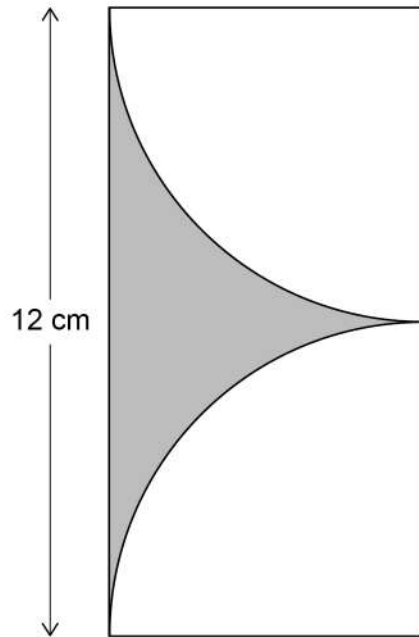
[4 marks]

$$a = \underline{\hspace{2cm}} \quad b = \underline{\hspace{2cm}}$$



8

Two identical quarter circles are cut from a rectangle as shown.

Not drawn
accurately

Work out the shaded area.

[4 marks]

Answer _____ cm^2 

9

The diagrams show the position of a tap when off and fully on.

The tap is fully on when the angle of turn is 180°

Off



Fully on



When fully on, water flows out of the tap at 14 litres per minute.

The rate at which water flows out is in direct proportion to the angle of turn.

The tap is turned 135°



The water flows into a tank with a capacity of 79.8 litres.

Will it take **less than** $7\frac{1}{2}$ minutes to fill the tank?

You **must** show your working.

[4 marks]



- 11 An approximation for the value of π is given by

$$4\left(1 - \frac{22}{57} + \frac{22}{85} - \frac{22}{105} + \frac{22}{117} - \frac{22}{242}\right)$$

Use your calculator to show that this approximation is within 0.1 of 3.14

[2 marks]

- 12 Work out

$$\frac{9.12 \times 10^{10}}{3.2 \times 10^4}$$

Give your answer in standard form.

[2 marks]

Answer _____



13

Ashraf is going to put boxes into a crate.

The crate is a cuboid measuring 2.5 m by 2 m by 1.2 m

Each box is a cube of length 50 cm

He does these calculations.

volume of crate	=	$2.5 \times 2 \times 1.2$
	=	6 m^3
volume of one box	=	$0.5 \times 0.5 \times 0.5$
	=	0.125 m^3
number of boxes	=	$6 \div 0.125$
	=	48

He claims,

“I can put 48 boxes in the crate.”

Evaluate Ashraf's method **and** claim.

[2 marks]

14

The cross section of a prism has n sides.

Circle the expression for the number of edges of the prism.

[1 mark]

$2n$

$3n$

$n + 2$

$2n + 3$

7

Turn over ►



15

The volume of a medal is 45 cm^3

The medal is made from copper and tin.

$$\text{volume of copper : volume of tin} = 22 : 3$$

The density of copper is 8.96 g/cm^3

The density of tin is 7.31 g/cm^3

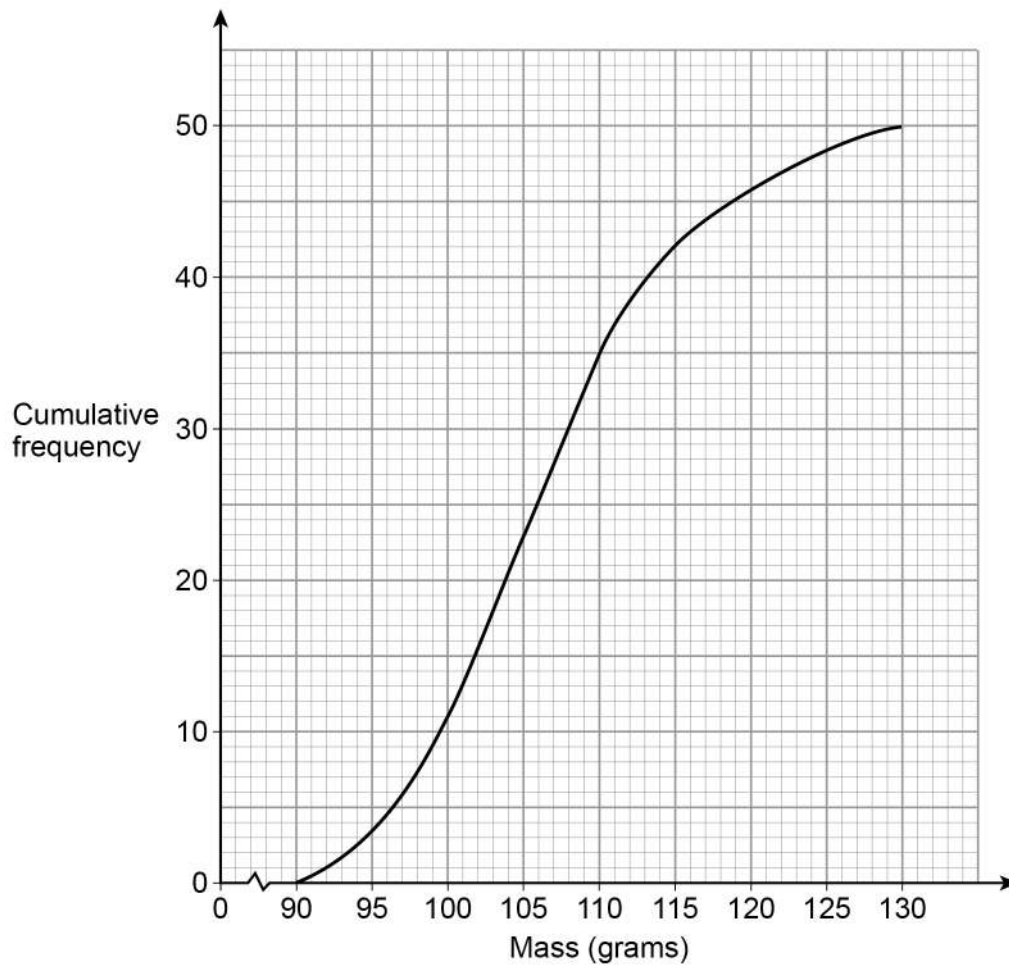
Work out the mass of the medal.

[4 marks]

Answer _____ grams



- 16** The cumulative frequency graph shows information about the masses of 50 apples.



- 16 (a)** Use the graph to estimate the median mass of the apples.

[1 mark]

Answer _____ grams

- 16 (b)** Estimate the proportion of the apples that have a mass greater than 115 grams.

[2 marks]

Answer _____

Turn over ►



17 a is a prime number.

b is an even number.

$$N = a^2 + ab$$

Circle the correct statement about N .

[1 mark]

could be
even or odd

always even

always prime

always odd

18 A bag contains 20 discs.

10 are red, 7 are blue and 3 are green.

18 (a) Marnie takes a disc at random before putting it back in the bag.

Nick then takes a disc at random before putting it back in the bag.

Olly then takes a disc at random.

Work out the probability that they all take a red disc.

[2 marks]

Answer _____



- 18 (b)** All 20 discs are in the bag.
Reggie takes three discs at random, one after the other.
After he takes a disc he does **not** put it back in the bag.

Reggie's first disc is blue.

Work out the probability that all three discs are different colours.

[3 marks]

Answer _____

6

Turn over ►



19

Lunch

Choose one starter and one main course

There are four starters and ten main courses to choose from.

Two of the starters and three of the main courses are suitable for vegans.

What percentage of the possible lunches have **both** courses suitable for vegans?

[3 marks]

Answer _____ %

20

n is a positive integer.

Prove algebraically that $2n^2\left(\frac{3}{n} + n\right) + 6n(n^2 - 1)$ is a cube number.

[3 marks]



21 y is inversely proportional to \sqrt{x}
 $y = 4$ when $x = 9$

21 (a) Work out an equation connecting y and x .

[3 marks]

Answer _____

21 (b) Work out the value of y when $x = 25$

[2 marks]

Answer _____

Turn over for the next question



22 Simplify fully $\frac{x^5 - 4x^3}{3x - 6}$

[3 marks]

Answer _____

23 PQR is a straight line.

$$PQ : QR = 3 : 1$$

$$\overrightarrow{PQ} = \mathbf{a}$$

Not drawn
accuratelyCircle the vector \overrightarrow{RQ}

[1 mark]

$$\frac{1}{3} \mathbf{a}$$

$$\frac{1}{4} \mathbf{a}$$

$$-\frac{1}{3} \mathbf{a}$$

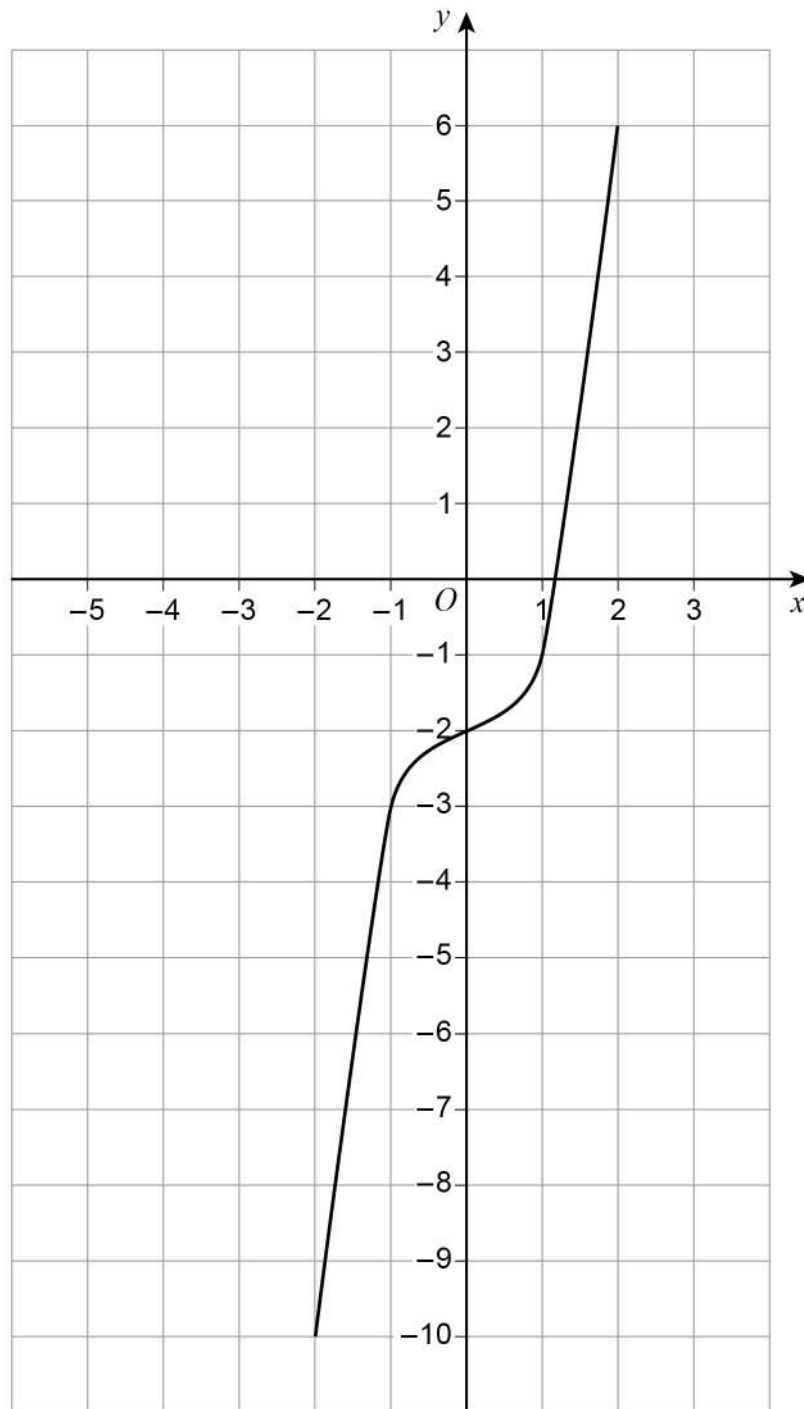
$$-\frac{1}{4} \mathbf{a}$$



24

Here is a sketch of $y = f(x)$

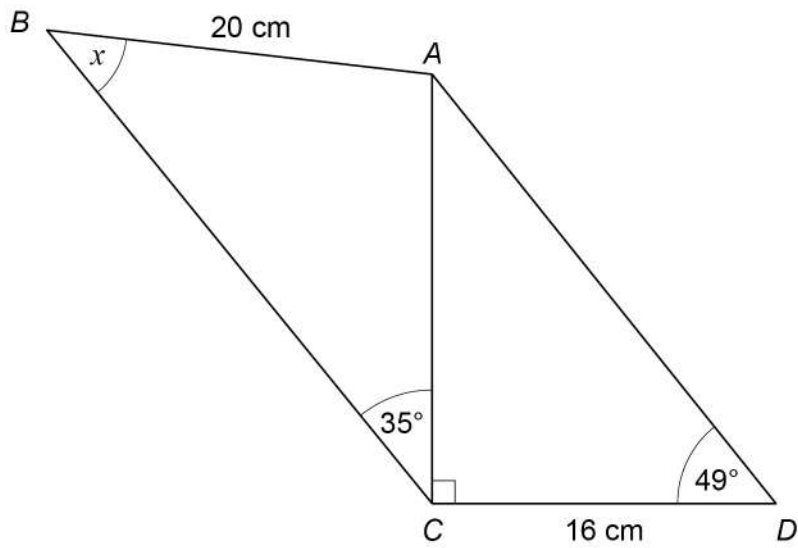
The curve passes through the points

 $(-2, -10)$ $(-1, -3)$ $(0, -2)$ $(1, -1)$ $(2, 6)$ On the grid, sketch the curve $y = f(x + 2)$ **[2 marks]**

6

Turn over ►

25

 ABC and ACD are triangles.Not drawn
accuratelyWork out the size of angle x .**[5 marks]**

Answer _____ degrees



26 $f(x) = \frac{x}{x+2}$ $g(x) = x^2 - 2$

Work out $fg(x)$

Give your answer in the form $a + bx^n$ where a , b and n are integers.

[3 marks]

Answer _____

27 The point $\left(3, \frac{1}{64}\right)$ lies on the curve $y = k^{-x}$ where k is a constant.

Show that the point $\left(\frac{1}{2}, \frac{1}{2}\right)$ lies on the curve.

[3 marks]



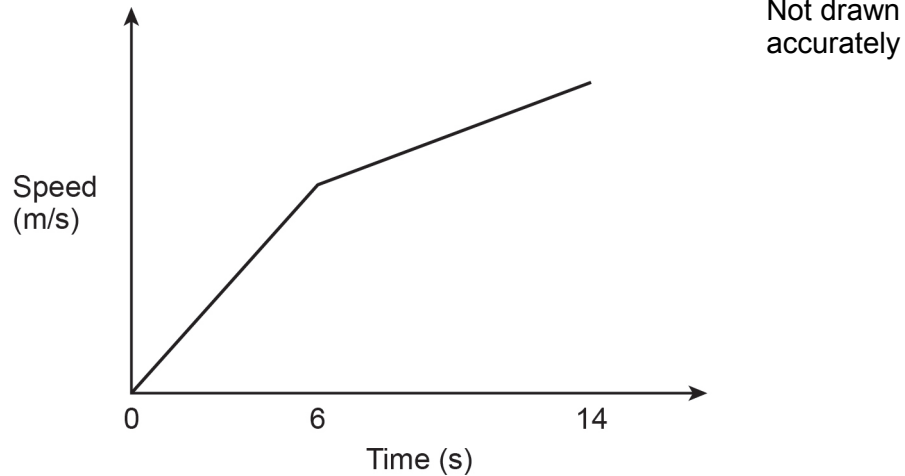
28 Izzy runs an 80-metre race in 14 seconds.

During the first 6 seconds her speed increases at a constant rate.

During the last 8 seconds her speed increases at a different constant rate.

Her speed at 14 seconds is 2 m/s more than her speed at 6 seconds.

Here is a sketch of her speed-time graph.



28 (a) Work out her acceleration during the last 8 seconds.

State the units of your answer.

[2 marks]

Answer _____



28 (b) When Izzy finishes the 80-metre race, her speed is v m/s

Work out the value of v .

[4 marks]

Answer _____

END OF QUESTIONS



There are no questions printed on this page

*Do not write
outside the
box*

**DO NOT WRITE ON THIS PAGE
ANSWER IN THE SPACES PROVIDED**

Copyright information

For confidentiality purposes, from the November 2015 examination series, acknowledgements of third-party copyright material will be published in a separate booklet rather than including them on the examination paper or support materials. This booklet is published after each examination series and is available for free download from www.aqa.org.uk after the live examination series.

Permission to reproduce all copyright material has been applied for. In some cases, efforts to contact copyright-holders may have been unsuccessful and AQA will be happy to rectify any omissions of acknowledgements. If you have any queries please contact the Copyright Team, AQA, Stag Hill House, Guildford, GU2 7XJ.

Copyright © 2018 AQA and its licensors. All rights reserved.

