

Please check the examination details below before entering your candidate information

Candidate surname

Other names

Centre Number

Candidate Number

--	--	--	--	--

--	--	--	--

Pearson Edexcel International GCSE

Time 1 hour 30 minutes

Paper
reference

4PA1/02

Pakistan Studies

PAPER 2: The landscape, people and economy of Pakistan

You do not need any other materials.

Total Marks

Instructions

- Use **black** ink or ball-point pen.
- **Fill in the boxes** at the top of this page with your name, centre number and candidate number.
- Answer **all** questions.
- Answer the questions in the spaces provided
– *there may be more space than you need.*

Information

- The total mark for this paper is 75.
- The marks for **each** question are shown in brackets
– *use this as a guide as to how much time to spend on each question.*

Advice

- Read each question carefully before you start to answer it.
- Try to answer every question.
- Check your answers if you have time at the end.

Turn over ►

P70873A

©2022 Pearson Education Ltd.

Q:1/1/1



Pearson

Some questions must be answered with a cross in a box ☒. If you change your mind about an answer, put a line through the box ☒ and then mark your new answer with a cross ☒.

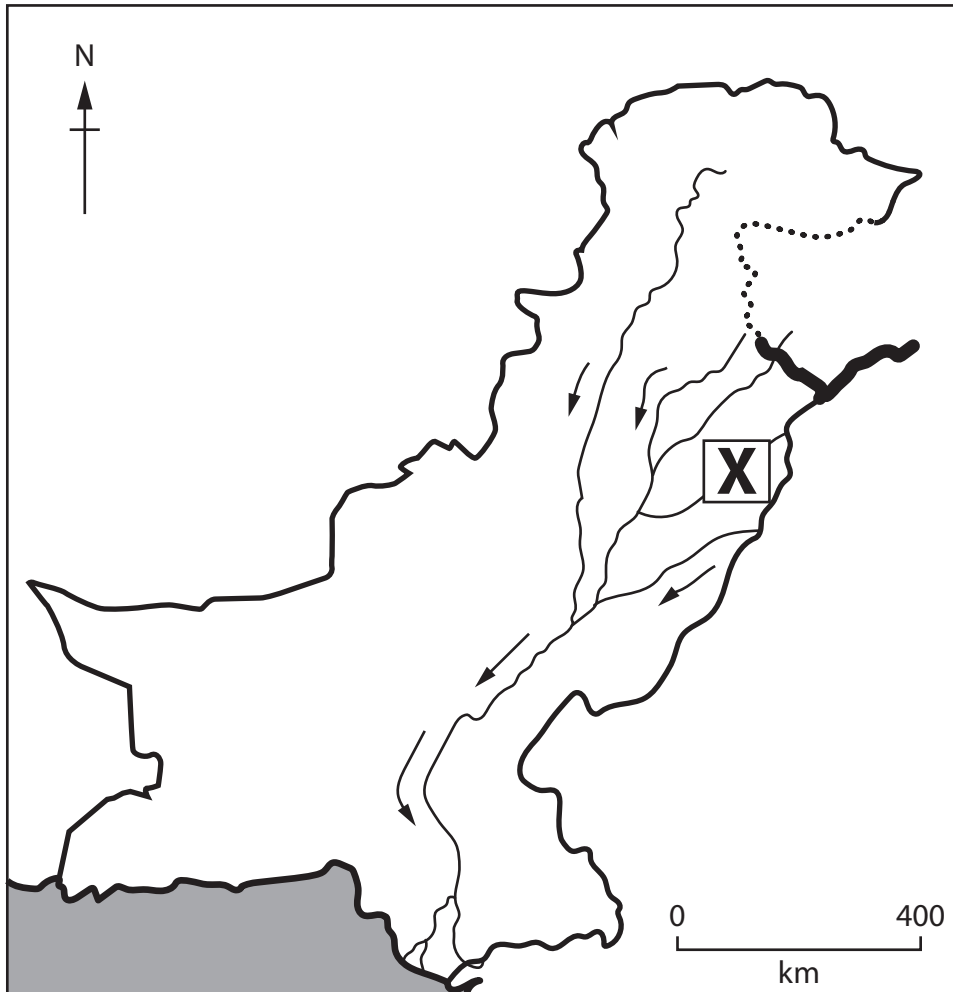
SECTION A

The Physical Environment

Write your answers in the spaces provided.

You should aim to spend no more than 30 minutes on this section.

- 1 (a) Study Figure 1 which is a map showing selected rivers in Pakistan.



Key




-  River direction of flow
-  Working international boundary
-  Line of international control

Figure 1

Selected rivers in Pakistan



(i) Identify River X.

(1)

<input type="checkbox"/>	A Chenab
<input type="checkbox"/>	B Jhelum
<input type="checkbox"/>	C Ravi
<input type="checkbox"/>	D Sutlej

(ii) State the term used to describe flat land on either side of a river.

(1)

(b) Name **two** non-renewable energy resources in Pakistan.

(2)

1

2

(c) Explain **one** cause of coastal flooding in Pakistan.

(3)

.....

.....

.....

.....

.....

.....

DO NOT WRITE IN THIS AREA

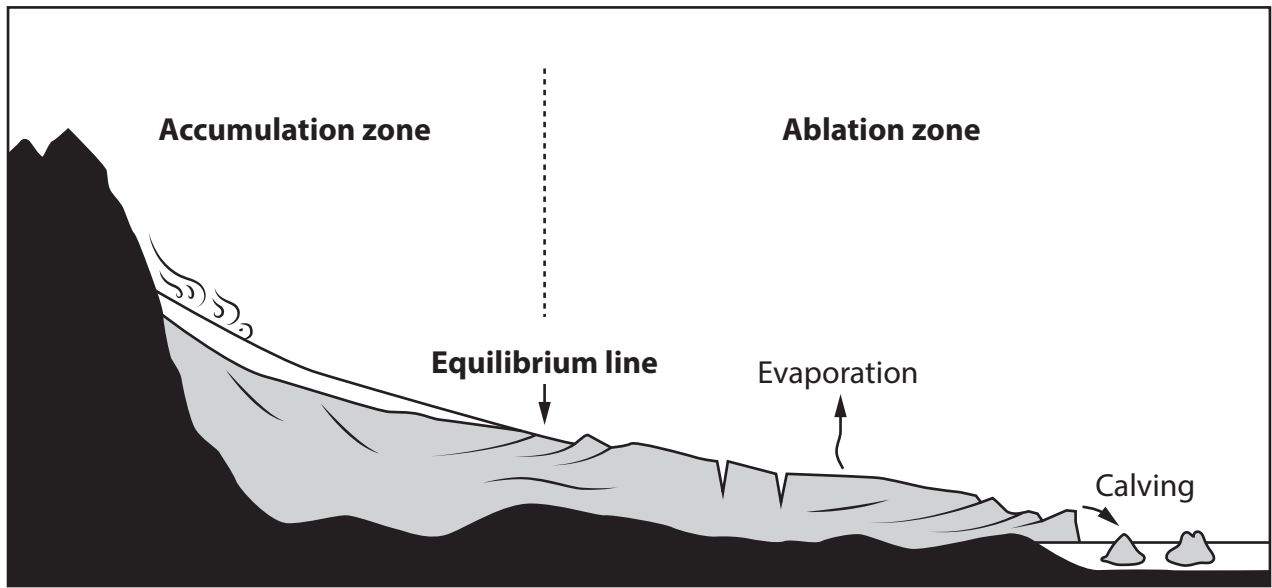
DO NOT WRITE IN THIS AREA

DO NOT WRITE IN THIS AREA



P 7 0 8 7 3 A 0 3 2 0

(d) Study Figure 2 which shows a cross section through a glacial system.



Key

 Rock

Figure 2
A glacial system

Suggest **two** processes that lead to glacial accumulation.

(4)

1

.....

2

.....

DO NOT WRITE IN THIS AREA

DO NOT WRITE IN THIS AREA

DO NOT WRITE IN THIS AREA



(e) Explain why there are seasonal variations in precipitation in Pakistan.

(6)

DO NOT WRITE IN THIS AREA

DO NOT WRITE IN THIS AREA

DO NOT WRITE IN THIS AREA

Area with horizontal dotted lines for writing the answer.



DO NOT WRITE IN THIS AREA

DO NOT WRITE IN THIS AREA

DO NOT WRITE IN THIS AREA

(f) Assess the environmental impacts resulting from the exploitation of **one** renewable energy resource used in Pakistan.

(8)

Named renewable energy resource

.....

.....

.....

.....

.....

.....

.....

.....

.....

.....

.....

.....

.....

.....

.....

.....

.....

.....

.....

.....

.....

.....

.....

.....

(Total for Question 1 = 25 marks)

TOTAL FOR SECTION A = 25 MARKS



DO NOT WRITE IN THIS AREA

DO NOT WRITE IN THIS AREA

DO NOT WRITE IN THIS AREA

BLANK PAGE




SECTION B

The Human Environment

Write your answers in the spaces provided.

You should aim to spend no more than 30 minutes on this section.

- 2 (a) Study Figure 3 which shows textile manufacturing in Islamabad, Pakistan.



(Source: © Waleeds/Shutterstock)

Figure 3

Textile manufacturing in Islamabad, Pakistan

- (i) Identify the economic sector which includes textile manufacturing.

(1)

<input type="checkbox"/>	A primary
<input type="checkbox"/>	B secondary
<input type="checkbox"/>	C tertiary
<input type="checkbox"/>	D quaternary

- (ii) Name **one** factor which affects the location of rural-based craft industries in Pakistan.

(1)



DO NOT WRITE IN THIS AREA

DO NOT WRITE IN THIS AREA

DO NOT WRITE IN THIS AREA

(b) State **two** challenges for the people of Pakistan caused by transnational corporations (TNCs).

(2)

1

2

(c) Explain **one** way that reforming land rights might increase agricultural productivity in Pakistan.

(3)

.....

.....

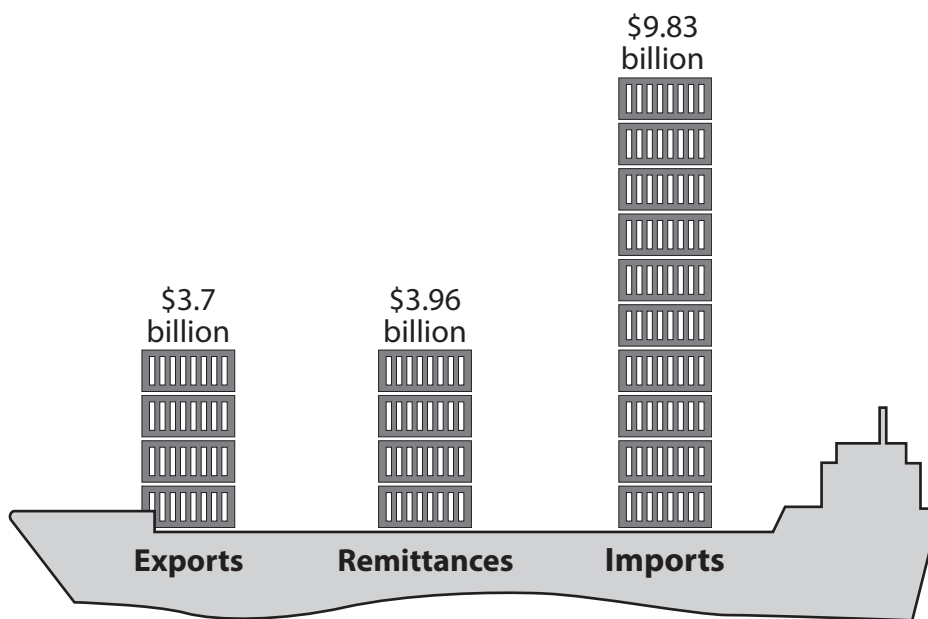
.....

.....

.....



(d) Study Figure 4 which gives information about Pakistan's trade balance in July and August 2019.



Key

 Trade gap – July–August 2019 (US\$)

(Source: <https://dailytimes.com.pk/321451/pakistans-trade-balance-improving-as-exports-continue-to-grow/>)

Figure 4

Pakistan's trade balance for July and August, 2019

Suggest **two** reasons for Pakistan's trade balance in 2019.

(4)

1

.....

2

.....



(e) Explain the economic challenges caused by Pakistan's transport system.

(6)

DO NOT WRITE IN THIS AREA

DO NOT WRITE IN THIS AREA

DO NOT WRITE IN THIS AREA

Area with horizontal dotted lines for writing the answer.



(f) Evaluate the impact of the loss of young skilled workers on the economic development of Pakistan.

(8)

Area with horizontal dotted lines for writing the answer.

(Total for Question 2 = 25 marks)

TOTAL FOR SECTION B = 25 MARKS

DO NOT WRITE IN THIS AREA

DO NOT WRITE IN THIS AREA

DO NOT WRITE IN THIS AREA



DO NOT WRITE IN THIS AREA

DO NOT WRITE IN THIS AREA

DO NOT WRITE IN THIS AREA

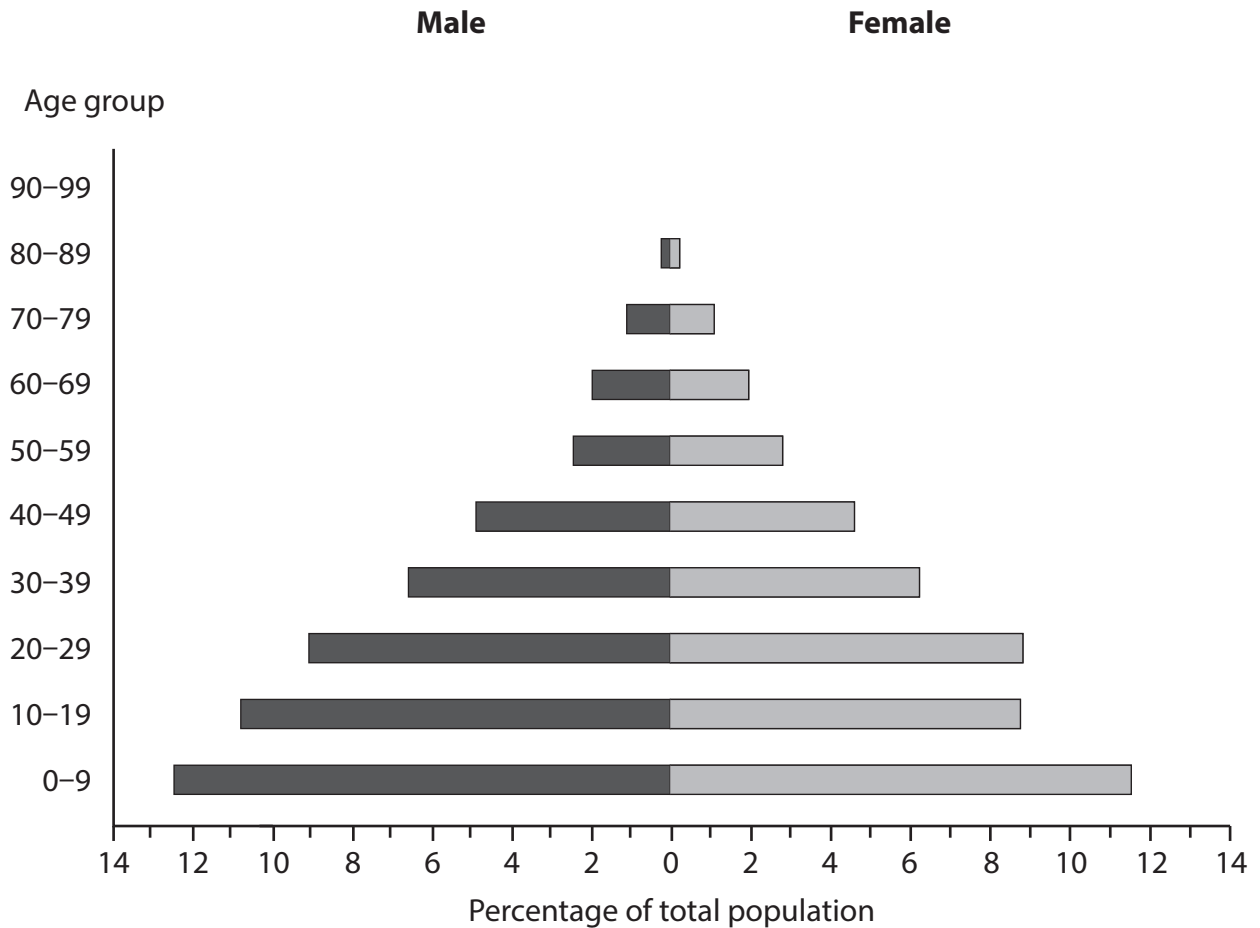
SECTION C

Challenges for Pakistan

Write your answers in the spaces provided.

You should aim to spend no more than 30 minutes on this section.

3 (a) Study Figure 5 which shows the population structure of Pakistan in 2020.



(Source from: <https://www.populationpyramid.net/pakistan/>)

Figure 5

Population structure of Pakistan 2020

(i) Identify the percentage of males and females in the 10–19 age group.

(1)

<input type="checkbox"/>	A 19.6
<input type="checkbox"/>	B 20.6
<input type="checkbox"/>	C 21.6
<input type="checkbox"/>	D 22.6



P 7 0 8 7 3 A 0 1 3 2 0

(ii) Name **one** measure used to determine the level of development of a country. (1)

(iii) Describe recent trends in life expectancy in Pakistan. (2)

(b) Explain why providing education is a challenge for Pakistan's rural communities. (3)

DO NOT WRITE IN THIS AREA

DO NOT WRITE IN THIS AREA

DO NOT WRITE IN THIS AREA



(c) Study Figure 6 which is a photograph of a poorer part of Lahore, Pakistan.



(Source: © WhiteLife/Shutterstock)

Figure 6

A poorer part of Lahore, Pakistan

Suggest **two** challenges of living in a megacity in Pakistan, such as Lahore.

(4)

- 1
- 2

DO NOT WRITE IN THIS AREA

DO NOT WRITE IN THIS AREA

DO NOT WRITE IN THIS AREA



(d) Explain how human factors influence the distribution of Pakistan's population.

(6)

Area with horizontal dotted lines for writing the answer.

DO NOT WRITE IN THIS AREA

DO NOT WRITE IN THIS AREA

DO NOT WRITE IN THIS AREA



(e) Assess the strategies used to mitigate or adapt to the effects of climate change in Pakistan.

(8)

DO NOT WRITE IN THIS AREA

DO NOT WRITE IN THIS AREA

DO NOT WRITE IN THIS AREA

(Total for Question 3 = 25 marks)

TOTAL FOR SECTION C = 25 MARKS
TOTAL FOR PAPER = 75 MARKS



DO NOT WRITE IN THIS AREA

DO NOT WRITE IN THIS AREA

DO NOT WRITE IN THIS AREA

BLANK PAGE



DO NOT WRITE IN THIS AREA

DO NOT WRITE IN THIS AREA

DO NOT WRITE IN THIS AREA

BLANK PAGE



P 7 0 8 7 3 A 0 1 9 2 0

DO NOT WRITE IN THIS AREA

DO NOT WRITE IN THIS AREA

DO NOT WRITE IN THIS AREA

BLANK PAGE

